



Maths Week/ Wiki Pāngarau 2025



Survivor Series/Kia Mōrehurehu

Day 2 Set A: Parts 1 and 2

For students

WHAT TO DO FOR STUDENTS

- 1 You can work with one or two others. Teams can be different each day.
- 2 Do the tasks and write any working you did, along with your answers, in your maths book.
- 3 Your teacher will tell you how you can get the answers to the questions and/or have your work checked.
- 4 When you have finished each day, your teacher will give you a word or words from a proverb. You could ask your teacher to explain what a proverb is.
- 5 At the end of the week, put the words together in the right order and you will be able to find the complete proverb! Your teacher may ask you to explain what the proverb means.
- 6 Good luck.




THE SIZE OF IT!


PART 1: Drawing different size objects

Task 1


a) Draw something tall.




b) Draw something short.




c) Draw something long.



d) Draw something wide.



e) Draw something tall and wide.




f) Draw yourself measuring something.



PART 2: Using measurement words - Taller, shorter and the same size as

Task 2

a) Draw one thing you think is **TALLER** than your hand.



b) Draw one thing you think is SHORTER than your hand.

c) Draw one thing you think is the same size as your hand.

Task 3

a) Trace around your hand onto a piece of paper.



b) Cut out the hand shape and write your name on it.



c) Using your hand templates find three actual items in your classroom that are **taller**, three actual items that are **shorter** and three actual items that are the **same size** as your hand. Draw or write them in the table below.

Taller than your hand	Shorter than your hand	Same size as your hand

--	--	--

Task 4

Choose at least three measurement words and use these in sentences (e.g., long, short, longer, shorter, heavy, heaviest, big, tall, tallest, small, smallest...). Draw a picture showing what your sentence says. An example is given in the table.

Answers		
Measurement word	Sentence	Picture
Longer	My pencil is longer than all my friend's pencils.	