

# Survivor Series Level 3

## Year 5 and 6 students.

### Survivor Series 2017

### Level 3



For Year 5 and Year 6 students.  
Curriculum level 3.

#### What to do.

#### For students.

1. You can work with a friend or two friends!  
Teams can be different each day.
2. Do the tasks and enter your answers in your maths book and show your teacher.
3. If you are right you will get the next task.
4. If you are wrong, answer the task again.
5. When you have finished each day you will get a code word.
6. At the end of the week you will have 5 code words. Put them together and this will tell you where your school's Maths Week treasure is.
7. Good luck !



**Monday:**

**2017**

**Codes.**

**Survivor Series**

**For Year 5 and Year 6 students**

**Level 3**

**Curriculum Level 3**

Here some problems to solve using the codes.  
All the places are in the South Island of New Zealand!  
Some are easy!

**Task One.**



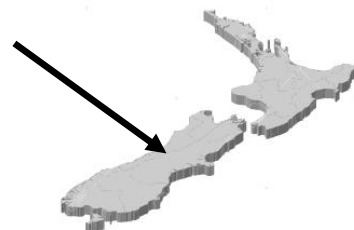
**These boulders are famous.  
What are they called?**

A	B	C	D	E	F	G	H	I	J	K	L	M	N	O	P	Q	R	S	T	U	V	W	X	Y	Z
U	V	W	X	Y	Z	A	B	C	D	E	F	G	H	I	J	K	L	M	N	O	P	Q	R	S	T

**S U K X G Q O H U A R J K X Y**

**Write the name into your book.**

**Who has been there?**



## Task Two.

This town is where the tourists enjoy coming to.  
You can see a cruise ship in the picture.  
What is the name of the town?

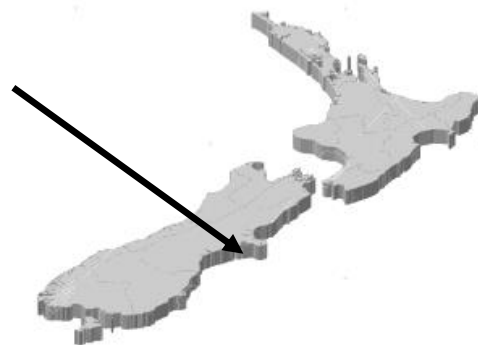


A	B	C	D	E	F	G	H	I	J	K	L	M	N	O	P	Q	R	S	T	U	V	W	X	Y	Z
Z	Y	X	W	V	U	T	S	R	Q	P	O	N	M	L	K	J	I	H	G	F	E	D	C	B	A

The name in code is

**Z P Z I L Z**

Write the name into your book.



### Task Three.



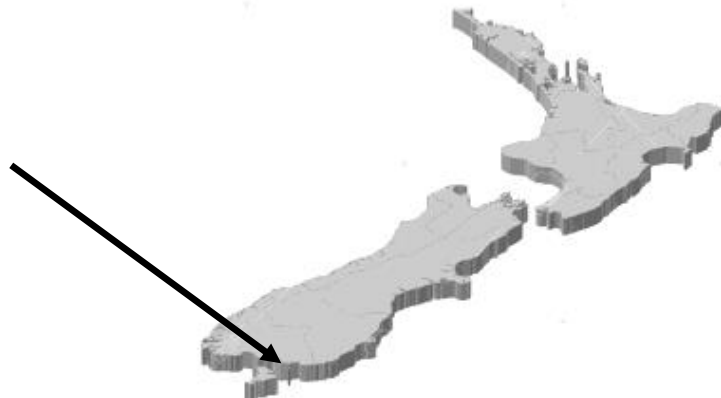
This town is near a river and is one of the most southern towns in New Zealand.

What town is it?

The name in code is

**18 9 22 5 18 20 15 14**

Write the name into your book.



## Task Four.



We are landing on the beach at Riverton Rocks!  
What is the name of the island we can see in the distance?

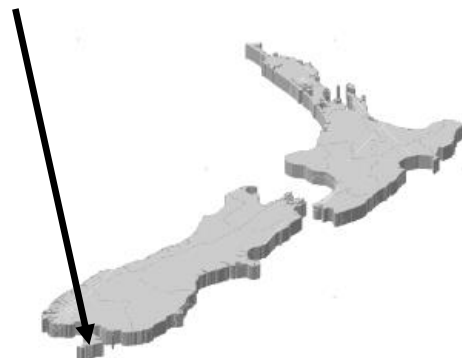
The name in code is

**e,e e,f b,f f,d b,b e,d e,f  
c,e e,e d,c b,b d,e b,e**

The key is

a	b	c	d	e	f
b	<b>A</b>	<b>B</b>	<b>C</b>	<b>D</b>	<b>E</b>
c	<b>F</b>	<b>G</b>	<b>H</b>	<b>I</b>	<b>J</b>
d	<b>K</b>	<b>L</b>	<b>M</b>	<b>N</b>	<b>O</b>
e	<b>P</b>	<b>Q</b>	<b>R</b>	<b>S</b>	<b>T</b>
f	<b>U</b>	<b>V</b>	<b>W</b>	<b>X</b>	<b>Y/Z</b>

Write the name into your book.



## Task Five.

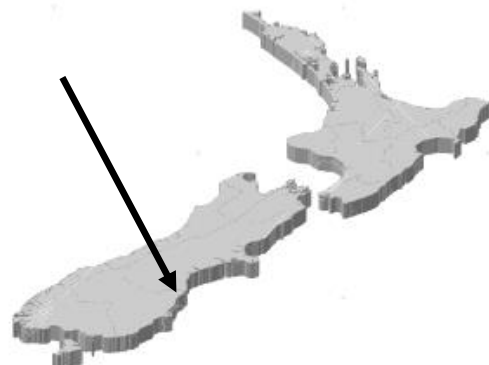


This city has an old part made of oamaru stone.  
What is the name of the city?

The name in code is

**d,f b,b d,d b,b e,d f,b**

a	b	c	d	e	f
b	<b>A</b>	<b>B</b>	<b>C</b>	<b>D</b>	<b>E</b>
c	<b>F</b>	<b>G</b>	<b>H</b>	<b>I</b>	<b>J</b>
d	<b>K</b>	<b>L</b>	<b>M</b>	<b>N</b>	<b>O</b>
e	<b>P</b>	<b>Q</b>	<b>R</b>	<b>S</b>	<b>T</b>
f	<b>U</b>	<b>V</b>	<b>W</b>	<b>X</b>	<b>Y/Z</b>



**Write the name into your book.**

## Task Six.



This beach is wild and beautiful.

No-one lives here.

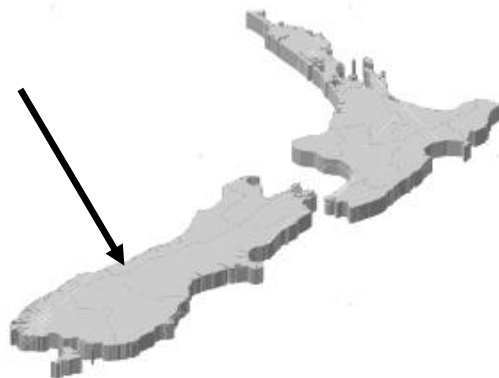
What is the name of the largest mountain you can see?

Its name in code is

**d,d d,f f,b d,e e,f b,d d,f d,f d,b**

The key is

a	b	c	d	e	f
b	<b>A</b>	<b>B</b>	<b>C</b>	<b>D</b>	<b>E</b>
c	<b>F</b>	<b>G</b>	<b>H</b>	<b>I</b>	<b>J</b>
d	<b>K</b>	<b>L</b>	<b>M</b>	<b>N</b>	<b>O</b>
e	<b>P</b>	<b>Q</b>	<b>R</b>	<b>S</b>	<b>T</b>
f	<b>U</b>	<b>V</b>	<b>W</b>	<b>X</b>	<b>Y/Z</b>



Write the name into your book.

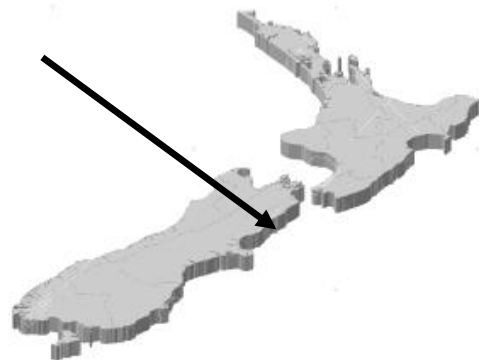
## Task Seven.



Wow !!  
An animal diving !  
It's huge !!  
Where is this place.  
What is the name of the town?

Its name in code is


**11, 1, 9, 11, 15, 21, 16, 1**



Write the name into your book.



## Task eight.



This painting is famous.  
In 2006 it was voted as New Zealand's favourite painting!  
It is of a little town in the mountains on the railway line between  
Christchurch and Greymouth.  
It was painted in 1936 by a famous New Zealand artist.

What is the name of the artist?

**X O Z G G T M A Y**



The key is

A	B	C	D	E	F	G	H	I	J	K	L	M	N	O	P	Q	R	S	T	U	V	W	X	Y	Z
U	V	W	X	Y	Z	A	B	C	D	E	F	G	H	I	J	K	L	M	N	O	P	Q	R	S	T

Write the name into your book.

