





## Maths Week/Pāngarau Wiki 2025



### Daily Dollar/Ko te Tāra o te Rā

#### Bill Ellwood Memorial Series

This series is a tribute to Bill Ellwood, who wrote much of the Maths Week material from 2006 to 2019. Bill passed away in June 2021.

### Set A Day 3

#### For students



#### WHAT TO DO FOR STUDENTS


- 1 You may work on your own or with someone else, and your teacher or someone else can help you.
- 2 Answer the questions.
- 3 Each question has a dollar value. Each day's questions total \$100 in value.
- 4 When you have answered the questions, your teacher will give you the answers.
- 5 If you are right, you will get the dollar value for each question. You then you can work out how many dollars you have earned for the day.
- 6 Add the number of dollars you have earned each day in the Daily Dollar questions and get a total for the week. Then you can compare your total for the week with others in your class.
- 7 Perhaps your teacher may award a prize for the highest total for the week!
- 8 Good luck!

## AOTEAROA / NEW ZEALAND FLAGS

### PART 1:

#### Question 1 (\$20)

New Zealand Ensign flag



(a) How many different colours can you see?

(b) Can you name the colours?

Answer

#### Question 2 (\$20)

Tino Rangatiratanga Māori flag



(a) How many different colours can you see?



(b) Can you name the colours?

Answer

**PART 2:**

**Question 3 (\$20)**

Fill in the table showing the number of shapes you can see on each flag.

<b>Shapes:</b>		
stars	= 4	0
koru		
circles		
rectangles		
triangles		

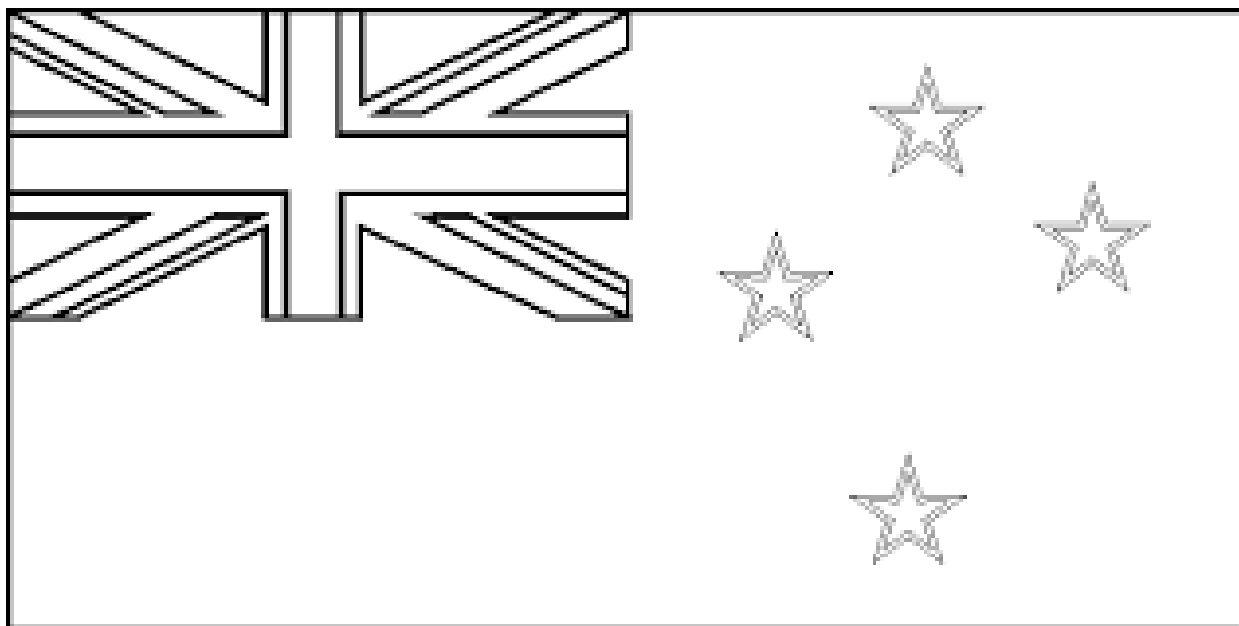
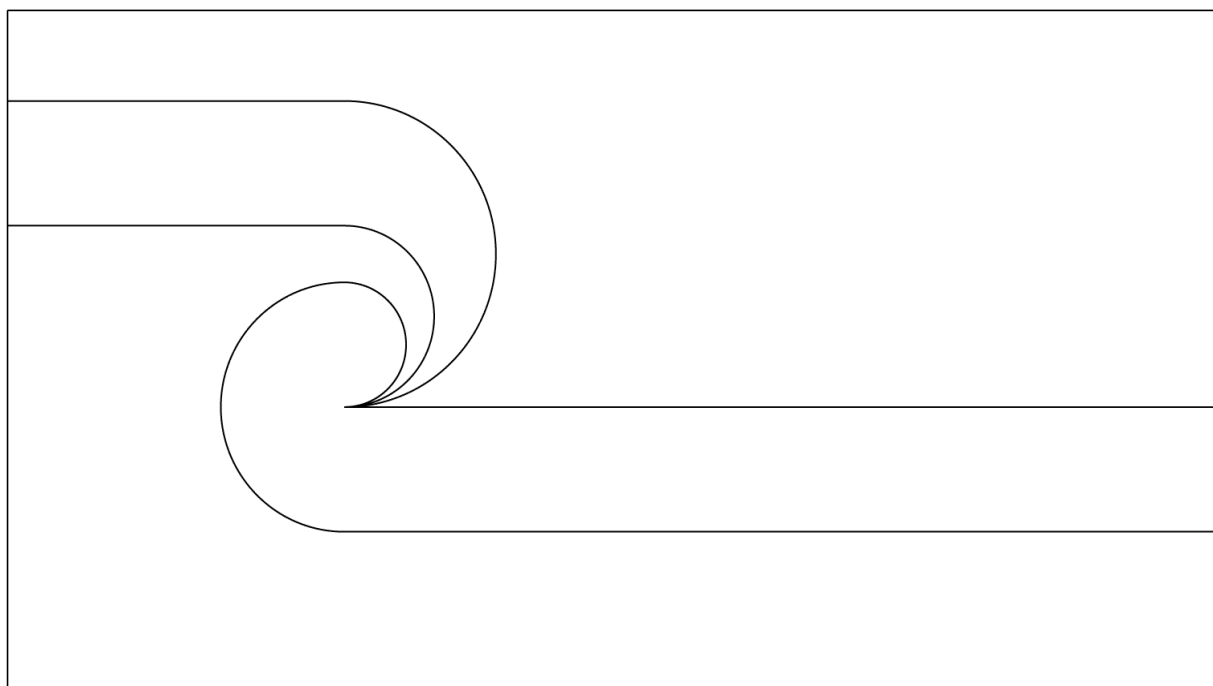
**Question 4 (\$20)**

Choose one of the shapes from the flags and draw it below.  
Can you list the number of sides and number of corners?

<p>Answer</p>
---------------

## Question 5 (\$20)

- (a) Colour in both flag templates
- (b) Draw both the flags in the blank space.
- (c) What do you notice is the same or different in both flags?



**Answer**